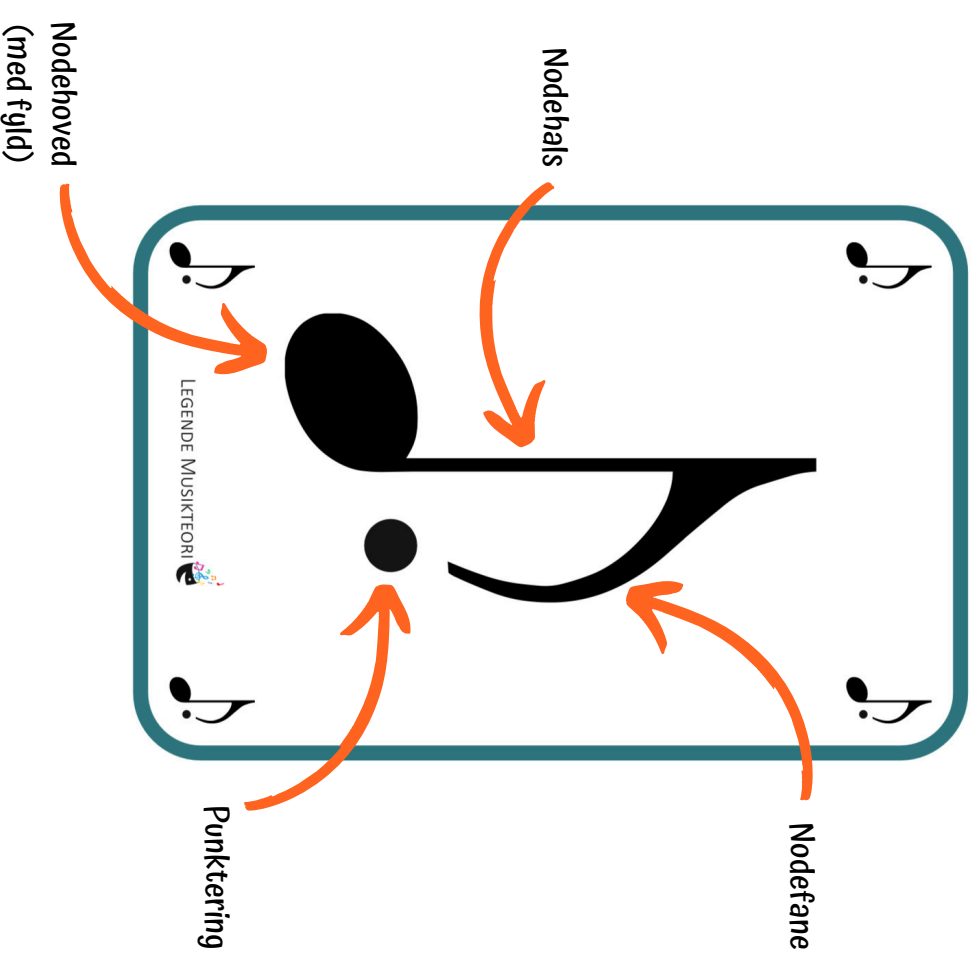
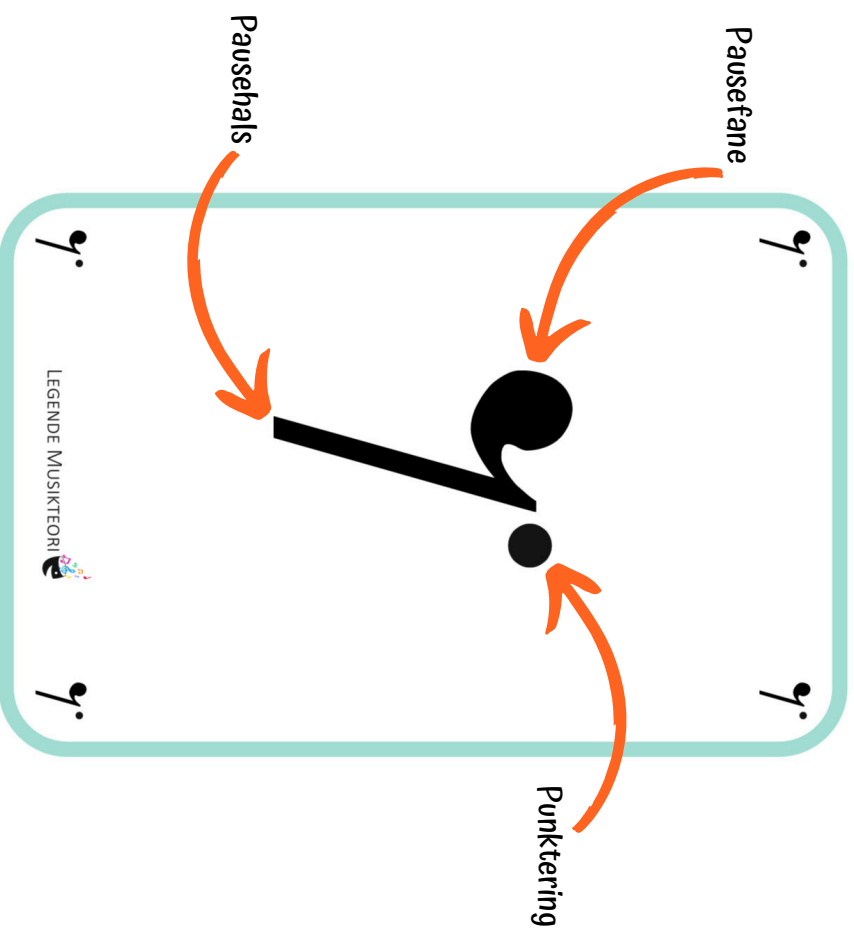



# Node- og pausetermer




# Ja eller nej?

Læs sætningerne. Passer de til pausen?



JA NEJ




**a** Helpausen er punkteret?

**b** Helpausen har pausefaner?

**c** Helpausen har en nodehals?


**d** Pausen har en pausefane?

**e** Dette er en halvnode?

**f** Pausen er ikke punkteret?

**g** Dette er en helpause?

**h** Pausen er ikke punkteret?

**i** Pausen har ingen pausefaner

**j** Dette er en punkteret fjerdedelsnode?

**k** Pausen har en pausefane?

**l** Pausen har pausehals?

**m** Pausen har én pausefane?

**n** Pausen er ikke punkteret

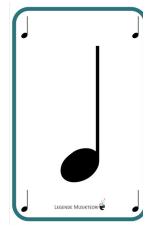
 

**o** Pausen har ingen pausehals

# Regn med noderne



Hvor mange smileys giver  
nedenstående regnestykker?




$$\text{Quarter note} = 1 \text{ smiley}$$

$$\text{Half note} = 2 \text{ smileys}$$

$$\text{Dotted half note} = 3 \text{ smileys}$$

$$\text{Whole note} = 4 \text{ smileys}$$



$$\text{Quarter note} + \text{Quarter note} = 3 \text{ smileys}$$

$$\text{Quarter note} + \text{Half note} + \text{Whole note} =$$

$$\text{Quarter note} + \text{Half note} + \text{Dotted half note} + \text{Whole note} =$$

$$\text{Quarter note} + \text{Half note} + \text{Dotted half note} + \text{Dotted half note} + \text{Whole note} =$$

$$\text{Quarter note} + \text{Half note} + \text{Whole note} + \text{Dotted half note} + \text{Dotted half note} + \text{Whole note} =$$

$$\text{Quarter note} + \text{Half note} + \text{Dotted half note} + \text{Dotted half note} + \text{Whole note} + \text{Dotted half note} + \text{Whole note} =$$